



GOVT. OF NCT OF DELHI  
Delhi Subordinate Services Selection Board  
FC-18, Institutional Area, Karkardooma, Delhi – 110092.  
[www.dsssb.delhigovt.nic.in](http://www.dsssb.delhigovt.nic.in)

|                   |                                  |
|-------------------|----------------------------------|
| Test Center Name: | iON Digital Zone iDZ 1 Sector 62 |
| Test Date:        | 10/11/2018                       |
| Test Time:        | 12:30 PM - 2:30 PM               |
| Subject:          | ASSISTANT TEACHER PRIMARY        |

Section : Mental Ability

Q.1 Kumaran is performing yoga with his head down and legs up. His face is towards the west. In which direction will his right hand be?

Question ID : 162653425

- Ans
- 1. East
  - 2. West
  - 3. North
  - 4. South

Q.2 Read the following information carefully and answer the question given below.

Question ID : 162653416

$M \times N$  means 'M is the sister of N';  
 $M \% N$  means 'M is the father of N';  
 $M \# N$  means 'M is the mother of N';

Which of the following means Y is the aunt of Z?

- Ans
- 1.  $Y \times X \% W \# Z$
  - 2.  $Z \times X \# Y$
  - 3.  $Y \% Z \times X$
  - 4.  $Y \times X \% Z$

Q.3 If '←' stands for '+', '↑' stands for '×', '→' stands for '-', '↓' stands for '÷', and '↔' stands for '=', then which of the following statements is CORRECT?

Question ID : 162653424

- Ans
- 1.  $7 \leftarrow 43 \uparrow 6 \downarrow 1 \leftrightarrow 4$
  - 2.  $3 \downarrow 6 \uparrow 2 \rightarrow 3 \leftarrow 6 \leftrightarrow 5$
  - 3.  $5 \rightarrow 7 \leftarrow 3 \uparrow 2 \leftrightarrow 4$
  - 4.  $2 \downarrow 5 \leftarrow 6 \rightarrow 2 \leftrightarrow 6$

Q.4 एक आदमी का परिचय देते हुए विजय ने लीला से कहा, "उसकी माँ आपके पिता की इकलौती बेटी है।" उस आदमी का सम्बन्ध लीला के साथ किस रूप में है?

Question ID : 162653411

- Ans
- 1. दामाद
  - 2. भाई
  - 3. पिता
  - 4. पुत्र

Q.5

Question ID : 162653426

Find the number that will come next in the below series.

2, 5, 10, 17, 26, 37, 50, 65, 82, \_\_\_\_\_

- Ans
- 1. 100
  - 2. 110
  - 3. 99
  - 4. 101

Q.6 A cube is painted green on all its surfaces. If it is cut into 125 smaller cubes of the same size, then how many cubes will have two sides painted in green?

Question ID : 162653422

- Ans
- 1. 36
  - 2. 42
  - 3. 24
  - 4. 48

Q.7 Select the word pair from the option that shares the same relationship as that shared between the words of the given pair.

Camel:Grunt :: \_\_\_\_\_ : \_\_\_\_\_

Question ID : 162653408

- Ans
- 1. Bee:Hive
  - 2. Sheep:Flock
  - 3. Snake:Reptile
  - 4. Duck:Quack

Q.8 Ganesh is taller than Sunil but NOT taller than Raja. Raja and Tarun are of the same height. Ganesh is shorter than Anil. Who among them is the shortest?

Question ID : 162653418

- Ans
- 1. Tarun
  - 2. Raja
  - 3. Ganesh
  - 4. Sunil

Q.9 Starting from her house, Neela walked 20 m towards the south. She turned left and walked 30 m more. She then turned left and walked 20 m. She again turned left and walked 40 m and reached the park. How far and in which direction is the park from her house?

Question ID : 162653414

- Ans
- 1. 10 m, south
  - 2. 10 m, east
  - 3. 10 m, west
  - 4. 10 m, north

Q.10 An apple costs ₹ 7. A pineapple costs ₹ 5. Charles spends ₹ 38 on these fruits. The number of apples purchased by him is:

Question ID : 162653415

- Ans
- 1. 5
  - 2. 3
  - 3. 4
  - 4. 6

Q.11 एक आदर्श अधिकारी होने के लिए आपको ताकिक रूप में क्या करना चाहिए?

Question ID : 162653423

- Ans
- 1. अपने दृष्टिकोण में सत्तावादी होना चाहिए
  - 2.

अपने अधीनस्थों के लिए सेमिनार आयोजित करना चाहिए

✓ 3.

स्वयं को उदहारण के रूप में प्रस्तुत करना चाहिए

✗ 4. अपने नियमों से चिपके रहना चाहिए

Q.12 Find the missing term in the following series.

Question ID : 162653409

Z1A, X2D, V6G, T21J, \_\_\_\_\_, P445P, N2676S

Ans ✗ 1. M38R

✓ 2. R88M

✗ 3. M88R

✗ 4. R38M

Q.13 The total number of digits used in numbering the pages of a book having 366 pages is \_\_\_\_\_.

Question ID : 162653419

Ans ✗ 1. 1080

✓ 2. 990

✗ 3. 999

✗ 4. 1098

Q.14 In a certain code language, SQUARE is coded as USWCTG. What would TRIANGLE be coded as in that language?

Question ID : 162653412

Ans ✓ 1. VTKCPING

✗ 2. VTKCPJNG

✗ 3. VTKCRING

✗ 4. VTKCPIMG

Q.15 'चिंता' से हमेशा क्या जुड़ा है?

Question ID : 162653420

Ans ✗ 1. मामिकता

✗ 2. गैर-भ्रष्टाचार

✗ 3. कठिनाई

✓ 4. बेचैनी

Q.16 Read the given statements and conclusions carefully and select which of the conclusions logically follow(s) from the statement(s).

Question ID : 162653413

**Statements:**  
Some adults are girls.  
Some girls are bold.

**Conclusions:**  
I. Some adults are not bold.  
II. Some girls are not bold.

Ans ✓ 1. Neither conclusion I nor II follows

✗ 2. Only conclusion I follows

✗ 3. Either conclusion I or II follows

✗ 4. Only conclusion II follows

Q.17

Question ID : 162653421

You are given a question and two statements I and II. You have to decide whether the data provided in the statements is sufficient to answer the question.

**Question:**

What is the shortest distance between Village X and Village Y?

**Statements:**

I. Village X is 15 km away from Village Z.

II. Village Y is 20 km away from Village Z.

Ans  1.

Data in statement I alone is sufficient to answer the question.

2.

Data in statement II alone is sufficient to answer the question.

3.

Data in either the statement I or statement II alone is sufficient to answer the question.

4.

Data in both the statements I and II is not sufficient to answer the question.

Q.18 When seen through a mirror, a clock seems to be showing time as 2:45. What is the actual time shown by the clock?

Ans  1. 9:15

2. 3:45

3. 9:45

4. 2:45

Question ID : 162653410

Q.19 निम्नलिखित में से असंगत ज्ञात करें।

Ans  1. रियाल

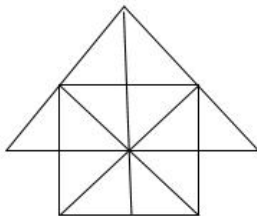
2. लीरा

3. युआन

4. टोक्यो

Question ID : 162653407

Q.20 Find the number of triangles and squares in the following figure.



Ans  1. 26 triangles, 8 squares

2. 28 triangles, 6 squares

3. 24 triangles, 6 squares

4. 26 triangles, 6 squares

Question ID : 162653417

Section : General Awareness

Q.1 Which factor is responsible to determine the stock of money in a bank?

Ans  1. All of the given options

2. The Monetary Base

Question ID : 162653439

3.

Individuals preference for currency versus checking deposits

4. The Reserve Deposit Ratio

Q.2 Which statement is found INCORRECT about Karnam Malleswari?

Question ID : 162653434

Ans  1.

She won the medal in women's 69 kg category at the Athens Olympics in 2004

2.

She was rewarded with the Arjuna Award for the year of 1994-95

3.

She won the bronze medal in weightlifting game

4.

She was the first Indian woman to win an Olympic medal

Q.3 With regard to the economy, which of the following statements is correct?

Question ID : 162653440

1. Appreciation - When the value of one currency increases regarding other currency.
2. Deflation- When the overall price level decreases so that inflation rate becomes negative.
3. Depreciation- The monetary value of an asset decreases over time due to use, wear and tear or obsolescence.

Ans  1. Both 2 and 3

2. Only 1

3. Both 1 and 2

4. 1, 2 and 3 all

Q.4 पतली द्रव्य में तरल पदार्थ गिरने से होने वाली घटना को \_\_\_\_\_ कहा जाता है।

Question ID : 162653441

Ans  1. चिपचिपापन

2. तापमान

3. केपिलरी एक्शन

4. ताप

Q.5 Which one the following dance form is NOT considered as a classical dance form?

Question ID : 162653435

Ans  1. Kathak

2. Bihu

3. Andhra Natyam

4. Manipuri

Q.6 With regard to the Fundamental Rights, find the INCORRECT option?

Question ID : 162653431

Ans  1.

Article 24: Prohibition of employment of children in factories,

2.

Article 27: Freedom as to payment of taxes for promotion of any particular religion

3.

Article 26: Freedom of conscience and free profession, practice and propagation of religion

4.

Article 23: Prohibition of traffic in human beings and forced labour

Q.7 Where is the International Court of Justice situated?

Question ID : 162653446

- Ans  1. The Hague  
 2. Paris  
 3. Vienna  
 4. Washington

Q.8 महासागर में पानी की गहराई को मापने के लिए एक \_\_\_\_\_ का उपयोग किया जाता है।

Question ID : 162653442

- Ans  1. फेंदममापी  
 2. शक्तिमापी  
 3. दुग्धमापी  
 4. वायुदाबमापी

Q.9 Which place is NOT included in the list of UNESCO's world heritage cultural sites of India?

Question ID : 162653436

- Ans  1. Mahabodhi Temple Complex of Bodh Gaya  
 2. Dilwara Jain Temple of Mount Abu  
 3. Humayun's Tomb  
 4. Rock Shelters of Bhimbetka

Q.10 Which of the following statements is true with reference to a Money Bill?

Question ID : 162653429

- Ans  1.  
If any question arises whether a Bill is a Money bill or not, the decision of the President of India is final  
 2.  
The Rajya Sabha must return the money bill within a period of maximum 2 months  
 3.  
The definition of "Money Bill" is given in Article 108 of the Constitution of India  
 4.  
If any question arises whether a Bill is Money bill or not, the decision of the Speaker of the Lok Sabha remains final

Q.11 Who has been honoured with the prestigious Rajiv Gandhi Khel Ratna Award in 2017?

Question ID : 162653433

- Ans  1. Sardar Singh  
 2. Virat Kohli  
 3. PV Sindhu  
 4. Saina Nehwal

Q.12 When did the Central Cabinet pass a resolution to grant reservation of 50% seats to women in the Panchayats?


Question ID : 162653430

- Ans  1. 2017  
 2. 2004  
 3. 2009  
 4. 2014

Q.13 Which company is a commercial arm of the Indian Space Research Organisation?


Question ID : 162653444


- Ans  1. Antrix Research Limited  
 2. Antrix Corporation Limited  
 3. Space Corporation of India

 4. Space Corporation Limited

Q.14 Which of the following is NOT true about the National Council of Educational Research and Training (NCERT)?

Question ID : 162653445

Ans  1. The NCERT is a constitutional body.

 2. The NCERT is an autonomous organisation.

 3.

The NCERT assists and advises the Central and State Governments on policies and programmes for qualitative improvement in school education.

 4.

It was established in 1961 by the Government of India.

Q.15 Which of the following is INCORRECT about the Satyashodak Samaj?

Question ID : 162653427

Ans  1.


The Samaj promoted marriages without the involvement of Brahmin priests.

 2.

Its members took a vow not to consume alcohol.


 3.

It was established initially in Satara and then in Pune.

 4. It was founded by Jyotirao Phule in 1873.

Q.16 सविनय अवज्ञा आंदोलन के बारे में कौन सा कथन सत्य है?

Question ID : 162653428

Ans  1. दिए गए विकल्पों में से कोई भी नहीं।

 2.

सी राजगोपालचारी नमक काढ़न तोड़ने के लिए कालीकट से पेय्यानुर चले गए।

 3.

4 अप्रैल 1930 को एक मुट्ठी नमक उठाकर, गांधीजी ने सविनय अवज्ञा आंदोलन का उद्घाटन किया।


 4.


तमिलनाडु में के.केलप्पन ने तंजौर तट पर त्रिचिनोपोलि से वेदरप्यम तक नमक मार्च का नेतृत्व किया।


Q.17 Sericulture is related to the production of \_\_\_\_\_.

Question ID : 162653437

Ans  1. cotton


 2. silk

 3. rubber


 4. sesame

Q.18 The right to form assembly, association, and movement is guaranteed to every citizen under \_\_\_\_\_.

Question ID : 162653432

Ans  1. Article 15

 2. Article 25

 3. Article 19

 4. Article 14

Q.19 Which of the following is INCORRECT about the PSLV?

Question ID : 162653443

Ans  1.

It is called as Polar Satellite Launch Vehicle.

 2.

It is the first Indian launch vehicle to be equipped with liquid stages.

3.

PSLV is the third generation launch vehicle of India.

4. It was first successfully launched in 2001.

Q.20 The Korba coal mines located in \_\_\_\_\_ state in India.

Question ID : 162653438

Ans  1. Bihar

2. Orissa

3. Jharkhand

4. Chhattisgarh

Section : Arithmetic Ability

Q.1 The HCF of two numbers is 18 and their sum is 216. How many such pairs of numbers are possible?

Question ID : 162653451

Ans  1. 2

2. 5

3. 3

4. 6

Q.2 Each edge of a cube is increased by 20%. What will be the percentage increase in its volume?

Question ID : 162653460

Ans  1. 72.8%

2. 90.6%

3. 60%

4. 172.8%

Q.3 A, B and C can complete a work in 10, 15 and 30 days respectively. A and B started the work but B left after 3 days and C joined A. In how many days was the work completed?

Question ID : 162653461

Ans  1. 6.25

2. 6.75

3. 7.25

4. 5.75

Q.4 An article is sold at a certain price. By selling it at  $\frac{4}{5}$  of that price, one loses 12%. What is his percentage loss at the original price?

Question ID : 162653457

Ans  1. 34%

2. 30%

3. 16%

4. 36%

Q.5 A train WITHOUT stoppage travels at a speed of 80 km/h and with stoppage it travels of 60 km/h. How many minutes does the train stop on an average per hour?

Question ID : 162653464

Ans  1. 10

2. 12

3. 15

4. 18



Q.6 The average marks of 40 students of a class were 58. Later on, it was found that the marks of two students were wrongly read as 38 and 42 in place of 83 and 24. What are the CORRECT average marks?

Question ID : 162653452

- Ans  1. 58.675  
 2. 59.125  
 3. 58.250  
 4. 57.750

Q.7 A sum of ₹ 21,710 is divided among A, B and C such that 2 times A's share, 5 times B's share and 6 times C's share are equal. What is the share of B?

Question ID : 162653454

- Ans  1. ₹ 4,175  
 2. ₹ 6,680  
 3. ₹ 12,525  
 4. ₹ 5,010

Q.8 The value of  $\frac{28 \times 28 + 43 \times 43 + 29 \times 29 - 28 \times 43 - 43 \times 29 - 29 \times 28}{(2.8)^2 + (4.3)^2 + (2.9)^2 - 2.8 \times 4.3 \times 8.7}$  is equal to:

Question ID : 162653447

- Ans  1. 100  
 2. 10  
 3. 1  
 4. 1000

Q.9 The value of a machine depreciates every year at the rate of 8% per annum. If the present value of the machine is ₹ 2,400, what will be the percentage decrease in the value at the end of 2 years?

Question ID : 162653458

- Ans  1. 16%  
 2. 16.48%  
 3. 16.75%  
 4. 15.36%

Q.10 If the numerator of a fraction is increased by 200% and denominator is increased by 300%, the fraction becomes  $\frac{5}{12}$ . What is the original fraction?

Question ID : 162653455

- Ans  1.  $\frac{10}{27}$   
 2.  $\frac{5}{9}$   
 3.  $\frac{5}{4}$   
 4.  $\frac{15}{27}$

Q.11 Two vessels A and B contains spirit and water in the ratio 3: 5 and 5: 7. Their contents are mixed in the ratio 3: 2. What will be the ratio of spirit and water in the new mixture?

Question ID : 162653453

- Ans  1. 47 : 73  
 2. 29 : 53  
 3. 38 : 73  
 4. 34 : 77

Q.12 By selling 12 articles, a person gains the selling price of 3 articles. What is his percentage gain?

Question ID : 162653456

- Ans  1. 18%

- 2. 15%
- 3.  $\frac{100}{3}\%$
- 4.  $\frac{50}{3}\%$

Q.13 The diagonal of a rectangle is 29 cm and its perimeter is 82 cm. What is the area of rectangle in  $\text{cm}^2$ ?

Question ID : 162653459

- Ans
- 1. 420
  - 2. 624.3
  - 3. 594.5
  - 4. 580

Q.14 What is the unit digit in  $(3^{53} + 6^{41} - 7^{63})$ ?

Question ID : 162653448

- Ans
- 1. 4
  - 2. 7
  - 3. 5
  - 4. 6

Q.15 If 6 men working 8 hours a day and earn ₹ 12,600 in 5 days, then 7 persons working 6 hours a day for 8 days will earn how much money?

Question ID : 162653462

- Ans
- 1. ₹ 16,250
  - 2. ₹ 15,780
  - 3. ₹ 17,640
  - 4. ₹ 14,650

Q.16 The value of  $0.5\overline{8} - 0.\overline{72} + 0.26\overline{9}$  is:

Question ID : 162653450

- Ans
- 1.  $0.14\overline{63}$
  - 2.  $0.15\overline{82}$
  - 3.  $0.13\overline{16}$
  - 4.  $0.15\overline{62}$

Q.17 The speed of a boat in still water is 10 km/h. It can go 15 km upstream and 37.5 km downstream in 5 hours. Which of the following is the speed of stream in km/h?

Question ID : 162653463

- Ans
- 1. 3.5
  - 2. 1.5
  - 3. 2.5
  - 4. 3

Q.18 What is the sum of the digits of least number which should be added to 625361 to make it a perfect square?

Question ID : 162653449

- Ans
- 1. 8
  - 2. 6
  - 3. 5
  - 4. 11

Comprehension:

The following table gives the marks obtained by students in a test out of 80 marks. Read the table and answer the following questions.

| Class interval  | 10-20 | 20-30 | 30-40 | 40-50 | 50-60 | 60-70 | 70-80 |
|-----------------|-------|-------|-------|-------|-------|-------|-------|
| No. of students | 15    | 25    | 30    | 45    | 40    | 30    | 15    |

SubQuestion No : 19

Q.1 What are the mean marks obtained by the students?

Question ID : 162653466

- Ans
- 1. 45.5
  - 2. 46.5
  - 3. 46
  - 4. 47

Comprehension:

The following table gives the marks obtained by students in a test out of 80 marks. Read the table and answer the following questions.

| Class interval  | 10-20 | 20-30 | 30-40 | 40-50 | 50-60 | 60-70 | 70-80 |
|-----------------|-------|-------|-------|-------|-------|-------|-------|
| No. of students | 15    | 25    | 30    | 45    | 40    | 30    | 15    |

SubQuestion No : 20

Q.2 If the above information is represented as a pie-chart showing the distribution of students in different classes, what is the central angle of the section representing the median class to the nearest whole degree?

Question ID : 162653467

- Ans
- 1. 81°
  - 2. 72°
  - 3. 54°
  - 4. 27°

Section : General English

Q.1 Consider the statement and fill in the blank.  
Ram qualified \_\_\_\_\_ an engineer before attending a business school.

Question ID : 162653470

- Ans
- 1. as
  - 2. himself
  - 3. first
  - 4. like

Q.2 What is the synonym of Fortify?

Question ID : 162653480

- Ans
- 1. Sap
  - 2. Encumber
  - 3. Debilitate
  - 4. Toughen

Q.3

Question ID : 162653476

Consider the statement and fill in the blank.

A person who wants to subvert a government is called a/an \_\_\_\_\_.

- Ans
- 1. analyst
  - 2. antichrist
  - 3. animist
  - 4. anarchist

Q.4 Consider the statement and fill in the blank.

Question ID : 162653472

The burning of fossil fuels releases harmful \_\_\_\_\_.

- Ans
- 1. petroleum chemicals
  - 2. oily substances
  - 3. hot air
  - 4. greenhouse gases

Q.5 What is the synonym of Abject?

Question ID : 162653482

- Ans
- 1. Jovial
  - 2. Buoyant
  - 3. Jaunty
  - 4. Miserable

Q.6 Consider the statement and fill in the blank.

A report has revealed that men are paid higher \_\_\_\_\_ and receive bigger bonuses than women.

Question ID : 162653473

- Ans
- 1. invoices
  - 2. earnings
  - 3. payments
  - 4. salaries

Q.7 Identify the word that has the closest association with the following word.

Question ID : 162653475

HOSPITALITY

- Ans
- 1. Therapist
  - 2. Doctor
  - 3. Host
  - 4. Hospital

Q.8 \_\_\_\_\_ can take the place of a conjunction and are placed before introductory words like 'therefore' or 'however'. They are also used to separate a list of things if there are commas within each unit.

Question ID : 162653468

- Ans
- 1. Semicolons
  - 2. Colons
  - 3. Apostrophes
  - 4. Parentheses

Q.9 What is the ANTONYM of Acrimonious?

Question ID : 162653481

- Ans
- 1. Harmonious
  - 2. Rancorous
  - 3. Callous
  - 4. Implacable

Q.10 Identify the infinitive phrase.

Question ID : 162653469

- Ans
- 1. My brother loves to watch movies.
  - 2. Dolu and Bolu love watching movies.
  - 3. Everybody loves to watch movies.
  - 4. Simon loves to watch movies.

Q.11 Consider the statement and fill in the blank.  
The skin of a snake is not rough or slimy; in fact, it is quite dry and \_\_\_\_\_.

Question ID : 162653474

- Ans
- 1. solid
  - 2. stiff
  - 3. rough
  - 4. smooth

Q.12 What is the ANTONYM of Ceremonious?

Question ID : 162653479

- Ans
- 1. Pompous
  - 2. Formal
  - 3. Informal
  - 4. Momentous

Q.13 Consider the statement and fill in the blank.

Question ID : 162653471

I won't lend you my car \_\_\_\_\_ you promise to drive carefully.

- Ans
- 1. unless
  - 2. except
  - 3. in case
  - 4. unlike

Q.14 What is the synonym of Cautious?

Question ID : 162653478

- Ans
- 1. Callous
  - 2. Careful
  - 3. Careless
  - 4. Casual

Q.15 What is the ANTONYM of Valiant?

Question ID : 162653477

- Ans
- 1. Impervious
  - 2. Undaunted

✓ 3. Cowardly

✗ 4. Intrepid

**Comprehension:**

Read the following passage and answer the questions given after it.

Struggling to survive, Indian airline companies could see the steepest hike in jet fuel prices in recent times on Monday with oil companies informing them of an over-7% increase for October rates. Airline sources say aviation turbine fuel (ATF) will cost about ₹ 74,530 per kilolitre in Delhi.

This level was last seen in March 2014 and is just short of the all-time high of ₹ 77,089 (in Delhi) in October 2013. However, the impact now will be double as the rupee-dollar exchange rate is at almost ₹ 73 (it used to be ₹ 61 at the start of 2014).

“The twin impact — 7.3% hike in ATF and crashing rupee — is going to be devastating for us as most costs of airlines (like aircraft lease rentals and maintenance contracts) are in dollars. Oil companies have informed us of the steepest hike in recent times from Monday. Jet fuel prices in India for domestic flights are already the highest globally,” said an airline official.

An airline like Air India expects ATF costs to rise by ₹ 65 crore this month. AI, which has an annual fuel bill of ₹ 8,500 crore, has about 15% domestic market share. What this could lead to now, say sources, is higher spot fares in the festive season. IndiGo had introduced a fuel surcharge on domestic flights of ₹ 200 and ₹ 400 for flights on sectors below and over 1,000 km respectively, from May 30, 2018. At that time, ATF was ₹ 70,000 per kl in Delhi and the exchange rate was at 67.5.

“With ATF at ₹ 74,500 in Delhi and the dollar at ₹ 73, airlines levying fuel surcharge could hike the same and others will start levying the same if they want to avoid a Kingfisher-like fate,” said an official.

Airlines are fuming as they do not understand why the government did not augment airport infrastructure at choked hubs like Delhi and Mumbai, which needed a second airport five years back. “We waste tonnes of fuel hovering in places like these. The government was just happy basking in the glory of India being the fastest-growing aviation market but did nothing about airport infrastructure. We should have had new and bigger airports getting inaugurated by now instead of just stone-laying ceremonies being held,” said a senior pilot.

SubQuestion No : 16

Q.1 “Stone-laying ceremonies being held” means that:

Ans ✗ 1. the airports are ready for functioning

Question ID : 162653487

✗ 2.

the airports are in the middle of being completed

✓ 3.

the first step of making an airport has been taken

✗ 4.

the airport plans are being prepared

**Comprehension:**

Read the following passage and answer the questions given after it.

Struggling to survive, Indian airline companies could see the steepest hike in jet fuel prices in recent times on Monday with oil companies informing them of an over-7% increase for October rates. Airline sources say aviation turbine fuel (ATF) will cost about ₹ 74,530 per kilolitre in Delhi.

This level was last seen in March 2014 and is just short of the all-time high of ₹ 77,089 (in Delhi) in October 2013. However, the impact now will be double as the rupee-dollar exchange rate is at almost ₹ 73 (it used to be ₹ 61 at the start of 2014).

“The twin impact — 7.3% hike in ATF and crashing rupee — is going to be devastating for us as most costs of airlines (like aircraft lease rentals and maintenance contracts) are in dollars. Oil companies have informed us of the steepest hike in recent times from Monday. Jet fuel prices in India for domestic flights are already the highest globally,” said an airline official.

An airline like Air India expects ATF costs to rise by ₹ 65 crore this month. AI, which has an annual fuel bill of ₹ 8,500 crore, has about 15% domestic market share. What this could lead to now, say sources, is higher spot fares in the festive season. IndiGo had introduced a fuel surcharge on domestic flights of ₹ 200 and ₹ 400 for flights on sectors below and over 1,000 km respectively, from May 30, 2018. At that time, ATF was ₹ 70,000 per kl in Delhi and the exchange rate was at 67.5.

“With ATF at ₹ 74,500 in Delhi and the dollar at ₹ 73, airlines levying fuel surcharge could hike the same and others will start levying the same if they want to avoid a Kingfisher-like fate,” said an official.

Airlines are fuming as they do not understand why the government did not augment airport infrastructure at choked hubs like Delhi and Mumbai, which needed a second airport five years back. “We waste tonnes of fuel hovering in places like these. The government was just happy basking in the glory of India being the fastest-growing aviation market but did nothing about airport infrastructure. We should have had new and bigger airports getting inaugurated by now instead of just stone-laying ceremonies being held,” said a senior pilot.

Q.1  
7 What were the prices of aviation fuel in March 2014?

Question ID : 162653485

- Ans
- 1. ₹ 76,500 per kilolitre
  - 2. ₹ 70,000 per kilolitre
  - 3. ₹ 77,089 per kilolitre
  - 4. ₹ 74,500 per kilolitre

**Comprehension:**

Read the following passage and answer the questions given after it.

Struggling to survive, Indian airline companies could see the steepest hike in jet fuel prices in recent times on Monday with oil companies informing them of an over-7% increase for October rates. Airline sources say aviation turbine fuel (ATF) will cost about ₹ 74,530 per kilolitre in Delhi.

This level was last seen in March 2014 and is just short of the all-time high of ₹ 77,089 (in Delhi) in October 2013. However, the impact now will be double as the rupee-dollar exchange rate is at almost ₹ 73 (it used to be ₹ 61 at the start of 2014).

“The twin impact — 7.3% hike in ATF and crashing rupee — is going to be devastating for us as most costs of airlines (like aircraft lease rentals and maintenance contracts) are in dollars. Oil companies have informed us of the steepest hike in recent times from Monday. Jet fuel prices in India for domestic flights are already the highest globally,” said an airline official.

An airline like Air India expects ATF costs to rise by ₹ 65 crore this month. AI, which has an annual fuel bill of ₹ 8,500 crore, has about 15% domestic market share. What this could lead to now, say sources, is higher spot fares in the festive season. IndiGo had introduced a fuel surcharge on domestic flights of ₹ 200 and ₹ 400 for flights on sectors below and over 1,000 km respectively, from May 30, 2018. At that time, ATF was ₹ 70,000 per kl in Delhi and the exchange rate was at 67.5.

“With ATF at ₹ 74,500 in Delhi and the dollar at ₹ 73, airlines levying fuel surcharge could hike the same and others will start levying the same if they want to avoid a Kingfisher-like fate,” said an official.

Airlines are fuming as they do not understand why the government did not augment airport infrastructure at choked hubs like Delhi and Mumbai, which needed a second airport five years back. “We waste tonnes of fuel hovering in places like these. The government was just happy basking in the glory of India being the fastest-growing aviation market but did nothing about airport infrastructure. We should have had new and bigger airports getting inaugurated by now instead of just stone-laying ceremonies being held,” said a senior pilot.



SubQuestion No : 18

Q.1 8 Which factors have made the struggle to survive tougher for aviation companies?

Question ID : 162653486

Ans  1.

Levying of fuel surcharge and lack of airport infrastructure.

 2.

A 7% increase in oil prices and crashing rupee.

 3.

A 7% hike in fuel prices and lack of airport infrastructure.

 4.

A lack of airport infrastructure and crashing rupee.

Comprehension:

Read the following passage and answer the questions given after it.

Struggling to survive, Indian airline companies could see the steepest hike in jet fuel prices in recent times on Monday with oil companies informing them of an over-7% increase for October rates. Airline sources say aviation turbine fuel (ATF) will cost about ₹ 74,530 per kilolitre in Delhi.

This level was last seen in March 2014 and is just short of the all-time high of ₹ 77,089 (in Delhi) in October 2013. However, the impact now will be double as the rupee-dollar exchange rate is at almost ₹ 73 (it used to be ₹ 61 at the start of 2014).

“The twin impact — 7.3% hike in ATF and crashing rupee — is going to be devastating for us as most costs of airlines (like aircraft lease rentals and maintenance contracts) are in dollars. Oil companies have informed us of the steepest hike in recent times from Monday. Jet fuel prices in India for domestic flights are already the highest globally,” said an airline official.

An airline like Air India expects ATF costs to rise by ₹ 65 crore this month. AI, which has an annual fuel bill of ₹ 8,500 crore, has about 15% domestic market share. What this could lead to now, say sources, is higher spot fares in the festive season. IndiGo had introduced a fuel surcharge on domestic flights of ₹ 200 and ₹ 400 for flights on sectors below and over 1,000 km respectively, from May 30, 2018. At that time, ATF was ₹ 70,000 per kl in Delhi and the exchange rate was at 67.5.

“With ATF at ₹ 74,500 in Delhi and the dollar at ₹ 73, airlines levying fuel surcharge could hike the same and others will start levying the same if they want to avoid a Kingfisher-like fate,” said an official.

Airlines are fuming as they do not understand why the government did not augment airport infrastructure at choked hubs like Delhi and Mumbai, which needed a second airport five years back. “We waste tonnes of fuel hovering in places like these. The government was just happy basking in the glory of India being the fastest-growing aviation market but did nothing about airport infrastructure. We should have had new and bigger airports getting inaugurated by now instead of just stone-laying ceremonies being held,” said a senior pilot.

SubQuestion No : 19

Q.1  
9 Which statement is NOT true according to the passage?

Question ID : 162653488

Ans  1.

Airlines waste tons of fuel hovering over the airports.

 2.

New and bigger airports are not ready in the country.

 3.

Airlines have levied a fuel surcharge of ₹ 200 on domestic flights on sectors over 1,000 km.

✗ 4.

Airlines need to hike the fuel surcharge with the rising costs.

Comprehension:

Read the following passage and answer the questions given after it.

Struggling to survive, Indian airline companies could see the steepest hike in jet fuel prices in recent times on Monday with oil companies informing them of an over-7% increase for October rates. Airline sources say aviation turbine fuel (ATF) will cost about ₹ 74,530 per kilolitre in Delhi.

This level was last seen in March 2014 and is just short of the all-time high of ₹ 77,089 (in Delhi) in October 2013. However, the impact now will be double as the rupee-dollar exchange rate is at almost ₹ 73 (it used to be ₹ 61 at the start of 2014).

“The twin impact — 7.3% hike in ATF and crashing rupee — is going to be devastating for us as most costs of airlines (like aircraft lease rentals and maintenance contracts) are in dollars. Oil companies have informed us of the steepest hike in recent times from Monday. Jet fuel prices in India for domestic flights are already the highest globally,” said an airline official.

An airline like Air India expects ATF costs to rise by ₹ 65 crore this month. AI, which has an annual fuel bill of ₹ 8,500 crore, has about 15% domestic market share. What this could lead to now, say sources, is higher spot fares in the festive season. IndiGo had introduced a fuel surcharge on domestic flights of ₹ 200 and ₹ 400 for flights on sectors below and over 1,000 km respectively, from May 30, 2018. At that time, ATF was ₹ 70,000 per kl in Delhi and the exchange rate was at 67.5.

“With ATF at ₹ 74,500 in Delhi and the dollar at ₹ 73, airlines levying fuel surcharge could hike the same and others will start levying the same if they want to avoid a Kingfisher-like fate,” said an official.

Airlines are fuming as they do not understand why the government did not augment airport infrastructure at choked hubs like Delhi and Mumbai, which needed a second airport five years back. “We waste tonnes of fuel hovering in places like these. The government was just happy basking in the glory of India being the fastest-growing aviation market but did nothing about airport infrastructure. We should have had new and bigger airports getting inaugurated by now instead of just stone-laying ceremonies being held,” said a senior pilot.

SubQuestion No : 20

Q.2 After reading this passage, it can be inferred that it is:

Question ID : 162653484

Ans ✗ 1. an article on the woes of Air India officials

✓ 2. a news item on the survival issue of airlines

- 3. a report on the increase of fuel prices
- 4. a newspaper editorial on government policies

Section : General Hindi

Comprehension:

नीचे दिये गए गद्यांश को पढ़कर पूछे गये प्रश्नों के उत्तर दीजिए।

द्विवेदी जी की बहुत बड़ी शक्ति है, पांडित्य को पीछे रखकर सहज हो पाने की क्षमता। वे बड़ी से बड़ी बात को सरल-सहज शैली में कह कर पाठक का विश्वास अर्जित कर सकते हैं। उनकी शैली अनौपचारिक होती है। उसमें पांडित्य और लोक जीवन का सहज प्रवाह दोनों हैं। जैनेंद्र कुमार, सियारामशरण गुप्त, राहुल सांकृत्यायन, पदुमलाल पुन्नालाल बखशी, बाबू गुलाबराय, सद्गुरुशरण अवस्थी आदि छायावाद युग के अन्य उल्लेखनीय निबंधकार हैं। शिवपूजन सहाय सहज सरल शैली के गद्यकार थे। 'हिमालय', 'बालक' और 'मतवाला' के संपादक के रूप में उन्होंने हिन्दी के उन्नयन में बड़ा महत्वपूर्ण योग दिया है।

SubQuestion No : 1

Q.1 'उन्नयन' का अर्थ है:

Question ID : 162653494

- Ans
- 1. अवरोध
  - 2. अवमूल्यन
  - 3. विकास
  - 4. ह्रास

Comprehension:

नीचे दिये गए गद्यांश को पढ़कर पूछे गये प्रश्नों के उत्तर दीजिए।

द्विवेदी जी की बहुत बड़ी शक्ति है, पांडित्य को पीछे रखकर सहज हो पाने की क्षमता। वे बड़ी से बड़ी बात को सरल-सहज शैली में कह कर पाठक का विश्वास अर्जित कर सकते हैं। उनकी शैली अनौपचारिक होती है।

उसमें पांडित्य और लोक जीवन का सहज प्रवाह दोनों हैं। जैनेंद्र कुमार, सियारामशरण गुप्त, राहुल सांकृत्यायन, पदुमलाल पुन्नलाल बखशी, बाबू गुलाबराय, सद्गुरुशरण अवस्थी आदि छायावाद युग के अन्य उल्लेखनीय निबंधकार हैं। शिवपूजन सहाय सहज सरल शैली के गद्यकार थे।

‘हिमालय’, ‘बालक’ और ‘मतवाला’ के संपादक के रूप में उन्होंने हिन्दी के उन्नयन में बड़ा महत्वपूर्ण योग दिया है।

SubQuestion No : 2

Q.2 शिवपूजन सहाय किसके संपादक नहीं थे?

Question ID : 162653493

- Ans
- 1. हिमालय
  - 2. बालक
  - 3. मतवाला
  - 4. सरस्वती

Comprehension:

नीचे दिये गए गद्यांश को पढ़कर पूछे गये प्रश्नों के उत्तर दीजिए।

द्विवेदी जी की बहुत बड़ी शक्ति है, पांडित्य को पीछे रखकर सहज हो पाने की क्षमता। वे बड़ी से बड़ी बात को सरल-सहज शैली में कह कर पाठक का विश्वास अर्जित कर सकते हैं। उनकी शैली अनौपचारिक होती है।

उसमें पांडित्य और लोक जीवन का सहज प्रवाह दोनों हैं। जैनेंद्र कुमार, सियारामशरण गुप्त, राहुल सांकृत्यायन, पदुमलाल पुन्नलाल बखशी, बाबू गुलाबराय, सद्गुरुशरण अवस्थी आदि छायावाद युग के अन्य उल्लेखनीय निबंधकार हैं। शिवपूजन सहाय सहज सरल शैली के गद्यकार थे।

‘हिमालय’, ‘बालक’ और ‘मतवाला’ के संपादक के रूप में उन्होंने हिन्दी के उन्नयन में बड़ा महत्वपूर्ण योग दिया है।

SubQuestion No : 3

Q.3 उल्लिखित युग के निबंधकार नहीं हैं:

Question ID : 162653492

- Ans
- 1. विद्यानिवास मिश्र
  - 2. बाबू गुलाब राय
  - 3. जैनेन्द्र कुमार
  - 4. राहुल संकृत्यायन

Comprehension:

नीचे दिये गए गद्यांश को पढ़कर पूछे गये प्रश्नों के उत्तर दीजिए।

द्विवेदी जी की बहुत बड़ी शक्ति है, पांडित्य को पीछे रखकर सहज हो पाने की क्षमता। वे बड़ी से बड़ी बात को सरल-सहज शैली में कह कर पाठक का विश्वास अर्जित कर सकते हैं। उनकी शैली अनौपचारिक होती है। उसमें पांडित्य और लोक जीवन का सहज प्रवाह दोनों हैं। जैनेन्द्र कुमार, सियारामशरण गुप्त, राहुल सांकृत्यायन, पदुमलाल पुन्नालाल बखशी, बाबू गुलाबराय, सद्गुरुशरण अवस्थी आदि छायावाद युग के अन्य उल्लेखनीय निबंधकार हैं। शिवपूजन सहाय सहज सरल शैली के गद्यकार थे। 'हिमालय', 'बालक' और 'मतवाला' के संपादक के रूप में उन्होंने हिन्दी के उन्नयन में बड़ा महत्वपूर्ण योग दिया है।

SubQuestion No : 4

Q.4 गद्यांश में पांडित्य का आशय है:

Question ID : 162653490

- Ans
- 1. महानता
  - 2. मौलिकता
  - 3. धार्मिकता
  - 4. विद्वता

Comprehension:

नीचे दिये गए गद्यांश को पढ़कर पूछे गये प्रश्नों के उत्तर दीजिए।

द्विवेदी जी की बहुत बड़ी शक्ति है, पांडित्य को पीछे रखकर सहज हो पाने की क्षमता। वे बड़ी से बड़ी बात को सरल-सहज शैली में कह कर पाठक का विश्वास अर्जित कर सकते हैं। उनकी शैली अनौपचारिक होती है।

उसमें पांडित्य और लोक जीवन का सहज प्रवाह दोनों हैं। जैनेंद्र कुमार, सियारामशरण गुप्त, राहुल सांकृत्यायन, पदुमलाल पुन्नालाल बखशी, बाबू गुलाबराय, सद्गुरुशरण अवस्थी आदि छायावाद युग के अन्य उल्लेखनीय निबंधकार हैं। शिवपूजन सहाय सहज सरल शैली के गद्यकार थे।

‘हिमालय’, ‘बालक’ और ‘मतवाला’ के संपादक के रूप में उन्होंने हिन्दी के उन्नयन में बड़ा महत्वपूर्ण योग दिया है।

SubQuestion No : 5

Q.5 द्विवेदी जी की शैली है:

Question ID : 162653491

- Ans
- 1. औपचारिक
  - 2. विदग्ध
  - 3. अनौपचारिक
  - 4. प्रतीकात्मक

Q.6 'सारे देश भर में रोष प्रकट किया गया।' वाक्य में अशुद्ध अंश है:

Question ID : 162653508

- Ans
- 1. प्रकट
  - 2. रोष
  - 3. सारे देश भर में
  - 4. किया गया।

Q.7 'चौड़ा' किस प्रकार का विशेषण है?

Question ID : 162653499

- Ans
- 1. संख्यावाचक
  - 2. गुणवाचक
  - 3. सार्वनामिक
  - 4. परिमाण बोधक

Q.8 निम्नलिखित में से कौन सा शब्द स्त्रीलिंग है?

Question ID : 162653502

- Ans
- 1. संगम
  - 2. संगठन

✓ 3. संवेदना

✗ 4. संकोच

Q.9 'निधङ्क' में कौन सा समास है?

Question ID : 162653501

Ans ✗ 1. द्वंद्व

✓ 2. अव्ययीभाव

✗ 3. तत्पुरुष

✗ 4. द्विगु

Q.10 'सफाई' किस प्रकार का संज्ञा है?

Question ID : 162653498

Ans ✗ 1. व्यक्तिवाचक

✓ 2. भाववाचक

✗ 3. पदार्थवाचक

✗ 4. जातिवाचक

Q.11 'संहार' में उपसर्ग है?

Question ID : 162653503

Ans ✓ 1. सम्

✗ 2. हार

✗ 3. सन्

✗ 4. स

Q.12 'जो गाये जाने योग्य न हो' के लिए एक शब्द होगा:

Question ID : 162653507

Ans ✗ 1. अज्ञेय

✗ 2. मुक्तछंद

✓ 3. अगेय

✗ 4. गेय

Q.13 निम्नलिखित में कौन सा शब्द तद्भव है?

Question ID : 162653496

Ans ✓ 1. जवान

✗ 2. ज्वलन

✗ 3. यम

✗ 4. जृम्भिका

Q.14 निम्नलिखित में तत्सम शब्द कौन सा है?

Question ID : 162653495

Ans ✓ 1. दुर्लभ

✗ 2. दूब



3. देवर

4. दो

Q.15 निम्नलिखित में कौन सा शब्द देशज है?

Question ID : 162653497

Ans  1. अल्ला

2. ठुमरी

3. कमीशन

4. आफत

Q.16 'आरोह' का विलोम होगा:

Question ID : 162653506

Ans  1. अपकर्ष

2. रोह

3. अवरोह

4. अनारूढ

Q.17 निम्नलिखित में वर्तनी की दृष्टि से कौन सा शब्द शुद्ध है?

Question ID : 162653509

Ans  1. हस्तक्षेप

2. हस्तच्छेप

3. हस्थक्षेप

4. हस्तछेप

Q.18 'उन्मीलित' का संधि विच्छेद होगा:

Question ID : 162653500

Ans  1. उत् + मलित

2. उत् + मीलित

3. उन् + मलित

4. उन् + मीलित

Q.19 'यमुना' का पर्यायवाची नहीं है:

Question ID : 162653505

Ans  1. अर्कजा

2. मन्दाकिनी

3. कृष्णा

4. कालिन्दी

Q.20 'अनुभवी' में प्रत्यय है:

Question ID : 162653504

Ans  1. व

2. ई

3. अनु

4. वी

Section : Subject Related

Q.1 In learner centered approach, the teacher plays:

Question ID : 162653523

Ans  1. an active role

2. a passive role

3. a detached role

4. a dominant role

Q.2 The concept of reinforcement and behaviour modifications was given by:

Question ID : 162653520

Ans  1. Thorndike

2. Skinner

3. Vygotsky

4. Piaget

Q.3 It is proven that individual attention in classroom is important in teaching - learning process because:

Question ID : 162653527

Ans  1. teachers can easily discipline students

2. children develop and learn at different rates

3. teacher training programmes insist on it

4. children learn better in groups

Q.4 As a teacher, you find a student in your class completes his work to get a star from you. The child:

Question ID : 162653514

Ans  1. is extrinsically motivated

2. respects his teacher

3. is intrinsically motivated

4. fears his teacher

Q.5 In language learning, associating words with pictures or meanings is an example of:

Question ID : 162653519

Ans  1. Principle of readiness

2. Classical conditioning

3. Trial and error

4. Principle of exercise

Q.6 EL Thorndike's Law of Exercise means:

Question ID : 162653515

Ans  1.

Learning takes place when the student is ready to learn

2.

Learning takes place when the student is rewarded

✓ 3. Repetition of the activity for more retention

✗ 4.

Learning takes place when the student is punished

Q.7 According to Piaget's cognitive development theory, the approximate age for Formal Operational Stage is:

Question ID : 162653516

Ans ✗ 1. 2 – 7 years

✓ 2. 12 – 14 years

✗ 3. 7 – 12 years

✗ 4. 0 – 2 years

Q.8 To think 'out of the box' is:

Question ID : 162653528

Ans ✗ 1. memory based thinking

✗ 2. focussed thinking

✓ 3. divergent thinking

✗ 4. convergent thinking

Q.9 What is DPEP?

Question ID : 162653511

Ans ✗ 1. District Pre-primary Education Programme

✗ 2. District Physical Education Programme

✓ 3. District Primary Education Programme

✗ 4.

Development of Physical Environment Programme

Q.10 Universalisation of education means:

Question ID : 162653510

Ans ✓ 1.

availability of education everywhere according to the specific need of the children and place

✗ 2. availability of education at any place

✗ 3.

availability of education at any place or time

✗ 4. availability of education at any time

Q.11 The experiential learning style theory is put forth by:

Question ID : 162653512

Ans ✗ 1. Paiget

✗ 2. Skinner

✓ 3. Kolb

✗ 4. Vygotsky

Q.12 \_\_\_\_\_ proposed that learning can happen by observing others (Social learning).

Question ID : 162653521

Ans ✗ 1. Gardener

- 2. Albert Bandura
- 3. Chomsky
- 4. Jerome Brunner

Q.13 What are the two dimensions of Kolb's model of learning styles?

Question ID : 162653518

Ans  1.

Abstract Conceptualisation and Reflective Observation

2.

Reflective Observation and Active Experimentation

3.

Concrete Experience and Active Experimentation

4.

Concrete Experience and Abstract Conceptualisation

Q.14 A teacher can enhance effective learning in the classroom by:

Question ID : 162653524

Ans  1. giving rewards

2. conducting frequent tests

3. relating the content to real life situations

4. motivation

Q.15 'Zone of Proximal Development' stated by Vygotsky means:

Question ID : 162653522

Ans  1. a child can do any new task on her/his own

2.

a child needs assistance to complete a task initially

3. a child is not cognitively developed

4. a child is not capable of doing a new task

Q.16 \_\_\_\_\_ is an effective method to encourage conceptual development in children.

Question ID : 162653525

Ans  1. The teacher giving all probable reasoning

2. Asking students to memorize

3.

No examples being given by the teacher to link new information

4.

Giving multiple examples to students and encouraging the use of reasoning

Q.17 According to Lawrence Kohlberg, a teacher can instill moral values in children by:

Question ID : 162653526

Ans  1.

involving children in discussions on moral issues

2. stating clear conduct rules

3. punishing them

4. making children listen to religious stories

Q.18 Fitting new information into existing schemes is called:

Question ID : 162653529

- Ans
- 1. Assimilation
  - 2. Equilibration
  - 3. Organisation
  - 4. Accommodation

Q.19 E – 9 countries means:

Question ID : 162653513

- Ans
- 1. Economically advance countries
  - 2. High population countries
  - 3. Economically backward countries
  - 4. Electronic countries

Q.20 Which principle of play-way method helps in cultivating self-discipline in students?

Question ID : 162653517

- Ans
- 1. Principle of responsibility
  - 2. Principle of curiosity
  - 3. Principle of creativity
  - 4. Principle of activity

Section : Subject Related

Q.1 What is important in ICT supported teaching learning strategies?

Question ID : 162653549

- Ans
- 1. Animation techniques
  - 2. Assessment plans
  - 3. Clear objectives
  - 4. Clear instructions

Q.2 Which of the following could possibly influence curriculum decisions?

Question ID : 162653544

- Ans
- 1. Pedagogical literature
  - 2. Personal interests
  - 3. Political agenda
  - 4. Social transition

Q.3 Students study social experiences and solve problems.

Question ID : 162653546

Which approach is observed in the above statement?

- Ans
- 1. Experientialism
  - 2. Idealism
  - 3. Realism
  - 4. Constructivism

Q.4 The statement by \_\_\_\_\_ affirms: "Those with special educational needs must have access to regular schools which should accommodate them within child centered pedagogy capable of meeting these needs."

Question ID : 162653543

- Ans
- 1. The Persons with Disabilities Act, 1995
  - 2. The Salamanca Statement and Framework for Action, 1994
  - 3. The National Trust Act, 1999
  - 4. The National Policy on Education, 1986

Q.5 'Aborigines' or 'aboriginals' are now identified as \_\_\_\_\_.

Question ID : 162653538

- Ans
- 1. aadivasis
  - 2. primitives
  - 3. vana jatis
  - 4. scheduled tribes

Q.6 What is BYOD approach in ICT?

Question ID : 162653548

- Ans
- 1. Bring Your Own Devices
  - 2. Best Youth Optical Devices
  - 3. Beyond Output Devices
  - 4. Bring Your Output Devices

Q.7 These are the major features of NPE (1986), EXCEPT:

Question ID : 162653537

- Ans
- 1. Important role of education
  - 2. National system of education
  - 3. Reorganisation of teaching hierarchy
  - 4. Education for equality

Q.8 Following are the characteristics of Adult Education EXCEPT that:

Question ID : 162653532

- Ans
- 1. it may include job skills training
  - 2. it is a continuing education programme
  - 3. it is need based
  - 4. it is a formal degree programme

Q.9 \_\_\_\_\_ are the main measures taken to improve effective increase in the enrolment of girls in schools.

Question ID : 162653534

- Ans
- 1. Gender-targeted provision of materials
  - 2. Scholarships, stipends, female teacher recruitment,
  - 3. Conditional cash transfers, free meals
  - 4. Parent counselling, free ships

Q.10 Following are the barriers in inclusive education, EXCEPT:

Question ID : 162653542

Ans

- 1. Educational policies
- 2. Social discrimination
- 3. Lack of trained teachers
- 4. Lack of physical facilities

Q.11 Which age is appropriate for primary school as per Indian school curriculum?

Question ID : 162653547

- Ans
- 1. Age 6 to 9 years
  - 2. Age 3 to 5 years
  - 3. Age 6 to 10 years
  - 4. Age 5 to 8 years

Q.12 What is curriculum?

Question ID : 162653545

- Ans
- 1. Curricular and extra-curricular activities
  - 2. Course, objectives, methods, evaluation
  - 3.  
Content, objectives, course, programme, experience, activities, relationships, skills, behaviour
  - 4.  
School subjects, experiences, activities, interpersonal relationships

Q.13 IEP stands for:

Question ID : 162653541

- Ans
- 1. Individualized Education Plan
  - 2. Instructional Evaluation Programme
  - 3. Independent Education Plan
  - 4. Institutional Evaluation Programme

Q.14 The most important characteristic of distance learning is that this teaching occurs where \_\_\_\_\_.

Question ID : 162653533

- Ans
- 1.  
the students take charge of their own learning
  - 2. the teacher and students are at a distance
  - 3. the teacher guides students using media
  - 4.  
the teacher and the student are in separate time and space

Q.15 NCF was initiated by setting up National Steering Committee National Focus Groups on the themes of.

Question ID : 162653536

- Ans
- 1.  
curriculum changes, admission policies and national integration
  - 2.  
curricular areas, systemic reforms and national concerns
  - 3.  
curriculum development, assessment and evaluation
  - 4.  
Curriculum reforms, ongoing practices and innovation

Q.16 Religion, gender, economic background and even learning styles are all notable factors of \_\_\_\_\_ in schools.

Question ID : 162653539

- Ans
- 1. culture
  - 2. personality
  - 3. diversity
  - 4. environment

Q.17 The basic principle of inclusion is:

Question ID : 162653540

- Ans
- 1. right to access and participate in education
  - 2. student centric teaching learning
  - 3. mainstreaming disabled students
  - 4. need based teaching learning

Q.18 Which of the following statements is NOT TRUE in case of adult education?

Question ID : 162653535

- Ans
- 1. It requires learners, ready to learn and primed to learn what they need to know
  - 2. It is subject-centered rather than problem-centered
  - 3. It is more self-directed and requires less guidance
  - 4. It needs internal motivation

Q.19 Children have the potential to assimilate knowledge and make meaning of them. From this perspective what is the role of a teacher?

Question ID : 162653530

- Ans
- 1. Director
  - 2. Demonstrator
  - 3. Lecturer
  - 4. Facilitator

Q.20 Suresh, a student of class VI, learns by doing and finds it difficult to follow when the teacher is only explaining. What teaching-learning strategy the teacher has to use in her mixed class?

Question ID : 162653531

- Ans
- 1. Visual method
  - 2. Demonstration method
  - 3. Play-way method
  - 4. Differentiated method

Section : Subject Related

Q.1 Students will develop their own concepts of mathematics. Which method does this example follow?

Question ID : 162653567

- Ans
- 1. Inductive method
  - 2. Constructivist method
  - 3. Discovery method
  - 4. Deductive method

Q.2 Which of the following are the characteristics of a good lesson objective?

Question ID : 162653556



Ans  1. Reliability

2. Comprehensibility

3. Measurability

4. Criticality

Q.3 Which of the following is a significant unique feature of language?

Question ID : 162653561

Ans  1. Language has reasoning

2. Language is scientific

3. Language is logical

4. Language consists of symbols

Q.4 The basic step towards language learning is \_\_\_\_\_.

Question ID : 162653563

Ans  1. Identifying source of the sound

2. Sound discrimination

3. Visual discrimination

4. Sound personification

Q.5 Adding content and concepts to the curriculum without changing the basic structure is called \_\_\_\_\_.

Question ID : 162653562

Ans  1. Inter-group education approach

2. Additive approach

3. Informative approach

4. Contributions approach

Q.6 Cognitive development in the early years is significantly influenced by which of the following?

Question ID : 162653566

Ans  1. Emotional development

2. Language development

3. Creativity

4. Social development

Q.7 What is the most important role of a teacher in a digital classroom?

Question ID : 162653551

Ans  1.

Operating technology in distance learning mode

2. Being a facilitator

3. Monitoring the class

4. Promoting critical thinking

Q.8 What is three language formula?

Question ID : 162653558

Ans  1.

Mother tongue or regional language as first language, Hindi as second language and English as third language

2.

English as first language, mother tongue as second language and Hindi as third language

3.

Mother tongue as first language, English as second language and Hindi as third language

4.

English as first language, Hindi as second language, mother tongue as third language

**Q.9** Who gave this definition of multimedia: "It is characterised by the presence of text, pictures, sound, animation and video, some or all of which are organised into some coherent program"?

Question ID : 162653552

**Ans**  1. Bill Gates

2. Fenrich

3. Phillips

4. Somnaidu

**Q.10** What is the origin of the word 'Mathematics'?

Question ID : 162653568

**Ans**  1. It comes from ancient Hindu word 'Ganita'

2. It comes from the word 'Mathematic'

3. It comes from the Greek word 'Mathema'

4. 'Mathematics' is the original word

**Q.11** Which quality of assessments helps to measure the achievement of lesson objectives?

Question ID : 162653557

**Ans**  1. Validity

2. Reliability

3. Quantity

4. Quality

**Q.12** What is the main objective of language?

Question ID : 162653560

**Ans**  1. To learn LSRW skills

2. To express thoughts

3. To understand emotions

4. To transfer knowledge

**Q.13** Who stated this definition: "Mathematics is the indispensable instrument of all physical researches"?

Question ID : 162653569

**Ans**  1. Gauss

2. Kant

3. Aristotle

4. Bacon

**Q.14** What CANNOT be replaced by ICT?

Question ID : 162653554

**Ans**  1. Teachers' motivation

2. Written examination

3. Student teacher interaction

4. Classroom interactions

**Q.15** The initial sounds infants make as a first step to communication is termed as \_\_\_\_\_.

- Ans  1. cooing  
 2. dubbing  
 3. babbling  
 4. mimic

Question ID : 162653564

Q.16 Which of the following DOES NOT serve the purpose of self-learning method?

- Ans  1.  
Allowing students to learn at their own space  
 2. Motivating students to learn  
 3.  
Discouraging teachers from teaching in the class  
 4.  
To develop higher order thinking skills among learners

Question ID : 162653550

Q.17 What should a teacher do to improve communication of students?

- Ans  1. Make them practise giving speeches'  
 2.  
Make them practice listening skills among the class  
 3.  
Encourage them to write their experiences in their own words  
 4. Show videos of communication patterns

Question ID : 162653559

Q.18 Which of the following is a common practice of learning to speak a language in children?

- Ans  1. Listening  
 2. Imitation  
 3. Understanding  
 4. Recognition

Question ID : 162653565

Q.19 Which University is the pioneer in India in ICT based teaching learning?


- Ans  1. Lovely Professional University (LPU)  
 2. Jawaharlal Nehru University (JNU)  
 3.  
Yashwantrao Chavan Maharashtra Open University (YCMOU)  
 4.  
Indira Gandhi National Open University (IGNOU)

Question ID : 162653553

Q.20 What is threatening someone online known as?

- Ans  1. Cyber law  
 2. Cyber bullying  
 3. Cyber crime





Question ID : 162653555

 4. Cyber safety

Section : Subject Related





Q.1 Jackman established the basic tenets of Nature Study, EXCEPT:

Question ID : 162653575

- Ans
-  1. lessons arranged by the seasons
  -  2. direct observation of nature by the child
  -  3. the relevance with the other studies/subjects
  -  4. understanding human nature





Q.2 If a teacher asks students to make a treasure map of ancient civilisations and write information about the lifestyle of people, she is conducting a project for \_\_\_\_\_ subject.

Question ID : 162653579

- Ans
-  1. ethnography
  -  2. social science
  -  3. environmental science
  -  4. life science

Q.3 Which of the following can have a significant impact on the social competence of an adolescent?

Question ID : 162653586

- Ans
-  1. Relationship with parents
  -  2. Reasoning in classrooms
  -  3. Response to situations
  -  4. Recreational activities





Q.4 \_\_\_\_\_ examines the effects of humans on nature, by applying biology, ecology, chemistry, and the traditional earth sciences.

Question ID : 162653572

- Ans
-  1. Life science
  -  2. Topology
  -  3. Geology
  -  4. Environmental science




Q.5 Students who take art classes develop an increased capacity to learn because:

Question ID : 162653582

- Ans
-  1. only talented students take art classes
  -  2. they expand their learning styles beyond linguistic and mathematical reasoning in their traditional classes
  -  3. they spend many hours in making art
  -  4. it gives hands on experience to students

Q.6 पृथ्वी विज्ञान वर्गों का एक मूल घटक, \_\_\_\_\_, पृथ्वी की भूमि का अध्ययन है।

Question ID : 162653573

- Ans
-  1. कालक्रम
  -  2. भूगोल
  -  3. भूकंप विज्ञान

✓ 4. भूगर्भशास्त्र

Q.7 How can we correlate mathematics with history?

Question ID : 162653570

Ans ✗ 1. Study the history of mathematicians

✓ 2.

Interpret the historical information including population charts and diagrams and other statistical information

✗ 3. Study the history of mathematics education

✗ 4. Study the history of mathematics

Q.8 Which of the following is NOT a true statement?

Question ID : 162653578

Ans ✓ 1.

Dramatisation in social sciences is used for imparting authentic, systematic and effective information about some events and trends

✗ 2.

Problem solving method should be intellectually challenging to children in teaching social science subject

✗ 3.

Project based method enable children to learn social science from their own experiences

✗ 4.

Social science lecture makes students inactive

Q.9 The subject \_\_\_\_\_ encompass diverse concerns of society and includes a wide a range of content, drawn from the disciplines of history, geography, political science, economics and sociology.

Question ID : 162653577

Ans ✗ 1. social work

✗ 2. socially useful productive work

✓ 3. social sciences

✗ 4. sociology

Q.10 \_\_\_\_\_ teachers are expected to possess a thorough understanding of physical geology, meteorology and oceanography along with the biology and ecology.

Question ID : 162653576

Ans ✓ 1. Environmental science

✗ 2. Geography

✗ 3. Social science

✗ 4. Earth science

Q.11 In peer acceptance aspect, children who receive many positive votes are called:

Question ID : 162653588

Ans ✓ 1. popular children

✗ 2. neglected children

✗ 3. controversial children

✗ 4. rejected children

Q.12 Why is inductive method used more than deductive method?

Question ID : 162653571

Ans ✗ 1. Inductive method is suitable for all topics

✗ 2.

Deductive method has no originality and creativity

✗ 3. It is used for higher studies level

✓ 4.

In Inductive method, content becomes crystal clear to students

Q.13 What is included in art education?

Question ID : 162653580

Ans ✗ 1. Art through education

✓ 2.

Area of learning that is based upon visual art and performing art

✗ 3. Education through art

✗ 4. Combination of art and education

Q.14 State true or false.

Question ID : 162653581

Art always has to be realistic. It cannot be art if it does not look like what our eyes have not seen in real life.

Ans ✗ 1. This statement is correct

✓ 2. This statement is false

✗ 3. This statement is partially false

✗ 4. This statement is partially correct

Q.15 \_\_\_\_\_ of 1969 requires environmental analyses of various development projects, which necessitates the presence of environmental scientists in businesses. Thus schools need to equip students for such work.

Question ID : 162653574

Ans ✗ 1.

National Environmental Programme and Administration

✗ 2.

National Education Planning and Administration

✗ 3. National Education Policy Act

✓ 4. National Environmental Policy Act

Q.16 Given below are two statements. Select the option that correctly depicts the relation between the two statements.

Question ID : 162653583

Gardening provides opportunities of increasing scientific knowledge and understanding. It improves students' confidence, resilience and self-esteem.

Ans ✗ 1.

Both the statement are the causes of one effect

✗ 2.

First statement is the cause of second statement

✓ 3.

Both the statement are the effects of one cause

✗ 4.

Second statement is the cause of first statement

Q.17 सेलमैत के अनुसार ,तीसरे पक्ष के परिप्रेक्ष्य किस आयु वर्ग में निर्धारित किए जाते हैं?

Question ID : 162653587

Ans ✗ 1. 7 - 12 वर्ष

✗ 2. 14 - व्यस्क

✗ 3. 3 - 9 वर्ष

✓ 4. 10 - 15 वर्ष

Q.18 If you have a child with some kind of physical handicap in your class and you have to take the class for outdoor games, what will you do as a teacher?

Question ID : 162653585


Ans

 1.

Tell another teacher to take him in his class till you complete the outdoor games of the other students

 2.

Try to involve him in suitable activities in safe environment and make him enjoy outdoor games


 3. Tell other students to take his responsibility

 4.

Tell him to sit in a corner of the ground, at a safe place


Q.19 Which of the following is one of the effective practices of helping rejected children?

Question ID : 162653589

Ans  1. Recording

 2. Modelling

 3. Training


 4. Reprimanding

Q.20 Why is health education important at primary school level?

Question ID : 162653584

Ans  1.

It ensures physical and mental health of a child

 2. It helps in physical fitness

 3. It is given by education commissions.

 4. To engage off periods of absent teachers


Section : Subject Related

Q.1 Knowledge and understanding of work education subject helps the learners:

Question ID : 162653599

Ans  1.

understand the process of planning and organising any work to be done.

 2. know various ways of doing social work.

 3.

identify needs of community in respect of food, health and hygiene, clothing, shelter, recreation and social service.

 4.

acquaint themselves with the system of conducting social work.

Q.2 How can we ensure food safety in schools?


Question ID : 162653596

Ans  1.

Protecting foods from insects, rodents, and other animals

 2.

Helping to treat health problems and preventing them

 3. Storing food at safe place

 4.

Building schools away from major breeding sites

Q.3 What are the hazardous components in school?

Question ID : 162653593

Ans

- 1. Food waste
- 2. Dust, chalks, papers
- 3. Sanitation waste
- 4.

Batteries, ballasts, mercury, switches, computer components, lamps

Q.4 What can be the substitute for products that generate inhalation hazard for students?

Question ID : 162653594

- Ans
- 1. Commercial dyes
  - 2. Dry clay, powdered paints
  - 3. Vegetable dyes
  - 4. Turpentine and other paint thinners

Q.5 What are the best practices for family and community involvement in schools?

Question ID : 162653609

- Ans
- 1.  
Regular communicating with the schools, partnership in decision making, students' record keeping
  - 2.  
Collaborating with community, improved interference, preparing students for examination
  - 3.  
Volunteering, taking interest in students' learning, organising school events
  - 4.  
Volunteering, improved parenting skills, regular communication with the school, active participation in students' learning

Q.6 The content of Work Education will be based on –

Question ID : 162653600

- a. the needs of the pupils
- b. syllabus design
- c. the resources and facilities available in the community
- d. teachers' availability in the school

- Ans
- 1. Only 'c'
  - 2. Both 'b' and 'd'
  - 3. All of them
  - 4. Both 'a' and 'c'

Q.7 The skill sets required for a teacher in school management are:

Question ID : 162653606

- Ans
- 1. technical, human and conceptual skills
  - 2. interpersonal and supervision skills
  - 3. managerial and administrative skills
  - 4. active listening and communication skills

Q.8 To meet the growing needs of education in a global economy it becomes imperative to provide sound \_\_\_\_\_ for working teachers to update their skills, knowledge and experience.

Question ID : 162653601

- Ans
- 1. in-service education
  - 2. teacher training
  - 3. teacher education
  - 4. pre-service training



Q.9 Research shows that students whose parents are involved in their education are more likely to:

- a) adapt well to school
- b) attend school more regularly
- c) complete homework more consistently
- d) become adamant and aggressive

Question ID : 162653608

- Ans
- 1. a, b, c, are correct and d is not correct
  - 2. a, c, d, are correct and b is not correct
  - 3. b, c, d, are correct and a is not correct
  - 4. a, b are correct and c, d are not correct

Q.10 Rapid growth in height and weight in puberty is known as:

Question ID : 162653590

- Ans
- 1. Growth symptoms
  - 2. Growth gains
  - 3. Growth pains
  - 4. Growth spurt

Q.11 Which of the following is a biological threat?

Question ID : 162653597

- Ans
- 1. Pesticides
  - 2. Vector-borne diseases
  - 3. Sanitary facilities
  - 4. Radiation

Q.12 \_\_\_\_\_ emphasized on the provision for better infrastructure, improved Pupil Teacher Ratio and the enhanced role of School Management Committee (SMC).

Question ID : 162653603

- Ans
- 1. EFA
  - 2. NPE (1986)
  - 3. RTE Act
  - 4. NCF (2005)

Q.13 Which of the following is NOT an objective of PTA?

Question ID : 162653604

- Ans
- 1. Increasing opportunities for the development of parenting skills.
  - 2. Suggesting measures to undertake assessment for the academic achievement of the children.
  - 3. Assuring access to an equitable and quality education for all children.
  - 4. Facilitating interactions among teachers, administrators, and community.

Q.14 \_\_\_\_\_ is NOT considered as the principle of in-service teacher training.

Question ID : 162653602





- Ans
- 1. Reforming curriculum and syllabi
  - 2. Keeping abreast with research in education
  - 3. Recognizing needs of the school and community

 4.

Effective means of accelerating the professional growth





Q.15 The National Policy on Education 1986 has conceived \_\_\_\_\_ as purposive and meaningful manual work that results in goods or services which are useful to the society.

Question ID : 162653598

- Ans
-  1. Work experience
  -  2. Social work
  -  3. Work education
  -  4. Social studies





Q.16 Students should be involved in keeping their school clean to create a sense of responsibility and pride in their school environment. What can be the result of this statement?

Question ID : 162653595

- Ans
-  1. School campus will be clean and hygienic
  -  2. Teachers and staff have less burden to clean the school
  -  3. Students will keep their home clean
  -  4. Skills learnt in school may be carried into other environments, hopefully for many years.

Q.17 A senior female school teacher is about to take over the leadership of a low-performing primary school. With respect to quality teaching, what can be the best step to begin this process with?

Question ID : 162653605

- Ans
-  1. Arranging to observe instruction in each classroom
  -  2. Trying to teach classes herself and improve students' learning
  -  3. Comparing teachers' performance for further replacements
  -  4. Having each teacher re- teach content to its best delivery





Q.18 POSDCORB stands for:

Question ID : 162653607

- Ans
-  1. Planning, Organising, Staffing, Deciding, Collaborating, Reporting and Budgeting
  -  2. Planning, Organising, Staffing, Directing, Co-ordinating, Reporting and Budgeting
  -  3. Planning, Organising, Scrutinising, Dictating, Co-ordinating, Reporting and Budgeting
  -  4. Planning, Organising, Staffing, Directing, Cooperating, Recording and Budgeting

Q.19 Growth in adolescence is reverse of that in childhood because:

Question ID : 162653591

- Ans
-  1. all part of the body grow simultaneously
  -  2. the torso grows first
  -  3. legs accelerate first
  -  4. hands, legs and feet accelerate first

Q.20 How can we avoid spread of communicable diseases?

Question ID : 162653592

- Ans
-  1.


By preventing students, who are suffering from communicable diseases, from coming to class

 2.

By creating awareness about communicable diseases

 3.

By properly disposing of the waste generated in school

 4. keeping the school closed for few days